


Count objects to 100 and read and write numbers in numerals and words




1 How many pencils are there?



There are pencils.

2 How many bread rolls are there?

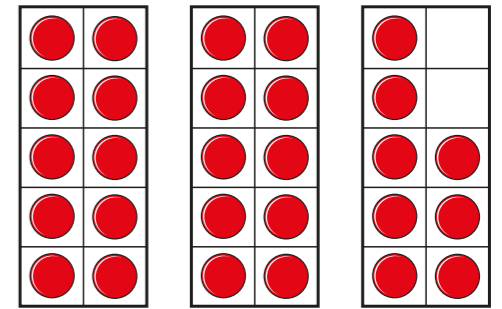


There are bread rolls.

How did you count them?

3 What number is represented?

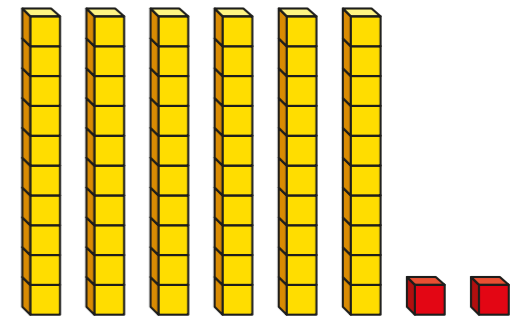
numerals



words _____

4 What number is represented?

numerals



words _____

5 Use base 10 to make the number 45
Draw the base 10



6 Write the numerals in words.

a) _____

b) _____

c) _____

d) _____

7 Write the words in numerals.

a) twelve

b) eighty

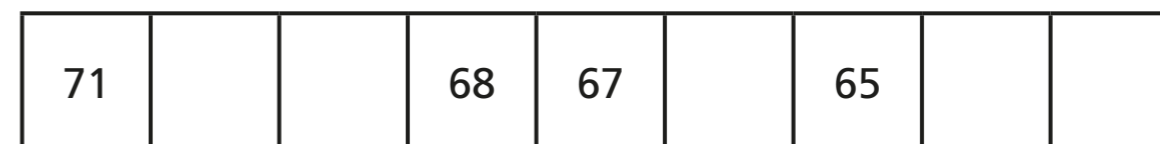

c) one hundred

d) nine


e) twenty-seven

f) fourteen

8 Complete the number tracks.



9 Eva has these sweets.



How many sweets does she have?

Eva has sweets.

Eva's friend gives her some more sweets.
Now she has 52

How many sweets does Eva's friend give her?
Count to find out.

Eva's friend gives her sweets.

