

Count in 1,000s

1 How many sweets are there?



Write your answer in numerals and words.

There are sweets.

There are _____ sweets.

2 Class 4B are collecting pennies in jars.

Each jar contains 1,000 pennies.




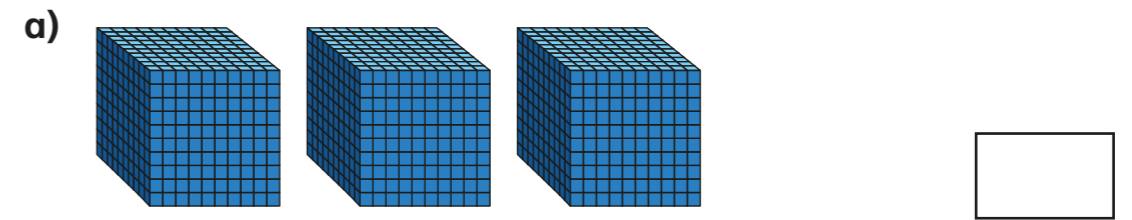
How many pennies are there in total?

Write your answer in numerals and words.


There are pennies.

There are _____ pennies.

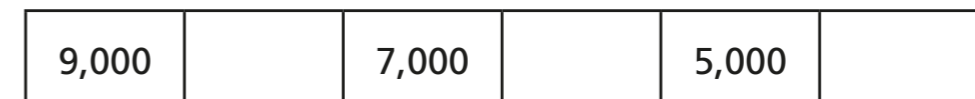
3 What numbers are represented?



4 Circle 9,000




5 Complete the number tracks.



- 6 Eva starts from zero and counts up in 1,000s.
Circle all the numbers that she says.

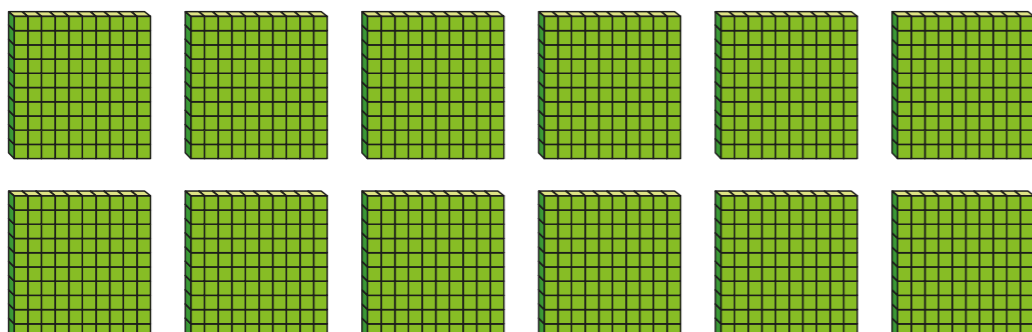
5,000 6,000 1,500 3,999
1,000 10,000 15,000 700

- 7 How many thousands are represented?




Explain how you know.

- 8 Circle 1,000



9



If I count in thousands from zero, I will always say an even number.

Is Rosie correct?

How do you know?

10

Dexter and Amir collect stickers.
Each sticker is worth 1,000 points.



a) Dexter collects 9 stickers.

How many points does he have?

b) Amir has 4 more stickers than Dexter.

How many points does Amir have?